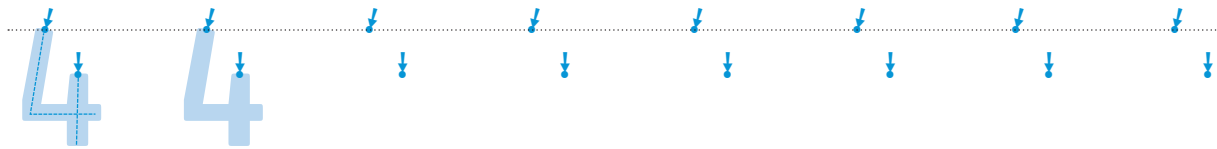
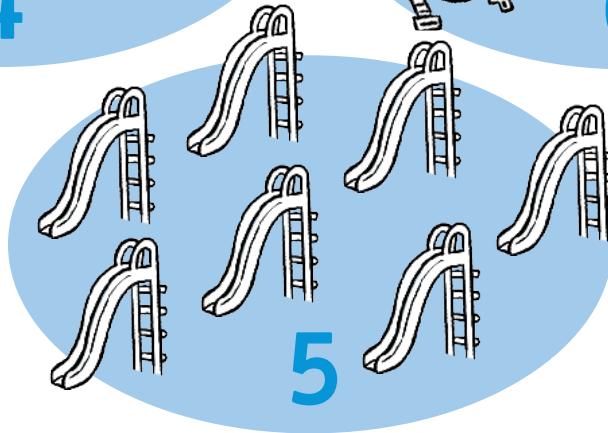

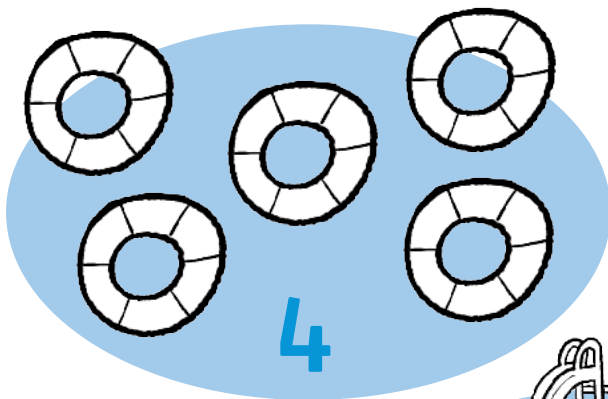


1 Ressegueix els nombres i completa:



NOM:

2 Pinta el nombre d'elements corresponent:



3 Relaciona:

1

2

3

4

5

6

tres

sis

un

quatre

dos

cinc

NOM:

SOLUCIONS

UNITAT 1

- 1 Resposta procedimental.
- 2 Resposta procedimental.
- 3 1, un; 2, dos; 3, tres; 4, quatre; 5, cinc; 6, sis.